

INDIAN SCHOOL AL WADI AL KABIR
DEPARTMENT OF MATHEMATICS (2025 – 2026)

TOPIC: SUBTRACTION

WORKSHEET 2

RESOURCE PERSON: Ms. SAVITHA D'SOUZA

WORD PROBLEMS



NAME: _____ CLASS: II SEC: ____ DATE: _____

Read the following word problems and solve them in the Mathematics notebook.

1. Megan collected 26 seashells at the beach. She lost 11 seashells on her way home. How many seashells are left with her?



2. A farmer got 64 eggs from the chicken coop. He sold 16 eggs at the market. How many eggs are left with him?



INDIAN SCHOOL AL WADI AL KABIR
DEPARTMENT OF MATHEMATICS (2025 – 2026)

TOPIC: SUBTRACTION

WORKSHEET 2


RESOURCE PERSON: Ms. SAVITHA D'SOUZA

WORD PROBLEMS


NAME: _____ CLASS: II SEC: ____ DATE: _____

Read the following word problems and solve them in the Mathematics notebook.

3. A classroom has 72 students. 34 students are girls. How many boys are there in the classroom?



3. A bus has 58 seats for passengers. 43 students went for a picnic in the bus. How many seats are left vacant in the bus?



Word Problems

1. No. of seashells Megan collected
No. of seashells she lost
No. of seashells left with her

$$\begin{array}{r} \text{T} \quad \text{O} \\ 26 \\ - 11 \\ \hline = 15 \end{array}$$

Ans - 15 seashells

2. No. of eggs a farmer got
No. of eggs he sold
No. of eggs left with him

$$\begin{array}{r} \text{T} \quad \text{O} \\ 564 \\ - 16 \\ \hline = 48 \end{array}$$

Ans - 48 eggs

3. No. of students in a classroom
No. of students who are girls
No. of students who are boys

	T	0
	6 7	12 2
-	3	4
=	3	8

Ans - 38 boys

4. No. of seats in a bus
No. of students went for a picnic
No. of seats left vacant in the bus

	T	0
	5	8
-	4	3
=	1	5

Ans - 15 seats